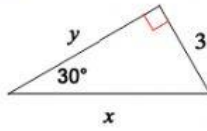


Special Right Triangles: 30-60-90 Practice

Find the value of x and y for each triangle

1.

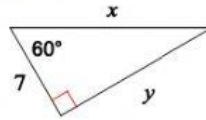


Given: _____

Solve for y :

Solve for x :

2.

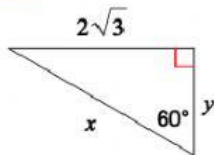


Given: _____

Solve for y :

Solve for x :

3.

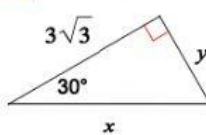


Given: _____

Solve for y :

Solve for x :

4.

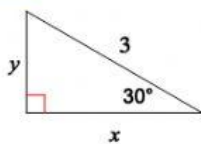


Given: _____

Solve for y :

Solve for x :

5.

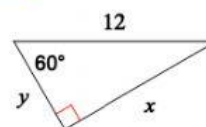


Given: _____

Solve for y :

Solve for x :

6.



Given: _____

Solve for y :

Solve for x :