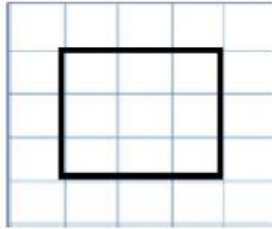


Area and Perimeter

Activity


Solve the following:

1m² grid



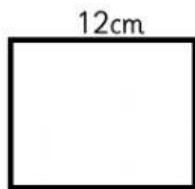
Area: _____

Perimeter: _____



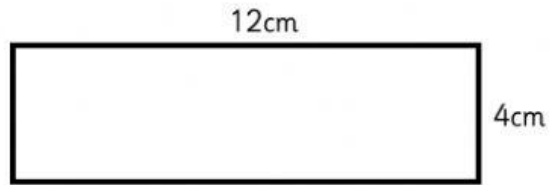
Area: _____

Perimeter: _____



Area: _____

Perimeter: _____



Area: _____

Perimeter: _____

Mr. Butler is a pigeon peas farmer. He uses a plot of land that is 3m by 5m. How much land space does he use for his pigeon peas? _____