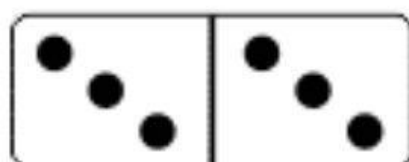



# Dominó Matemático

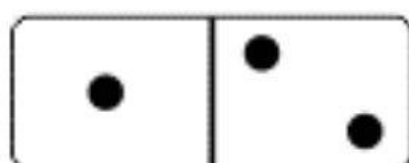
Qual é a soma dos dominós?




$$3 + 3 =$$




$$\_\_ + \_\_ =$$



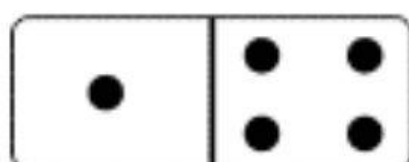
$$\_\_ + \_\_ =$$



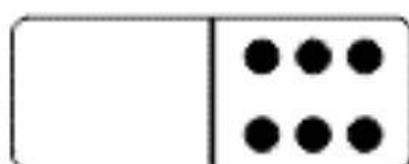
$$\_\_ + \_\_ =$$



$$\_\_ + \_\_ =$$



$$\_\_ + \_\_ =$$



$$\_\_ + \_\_ =$$

