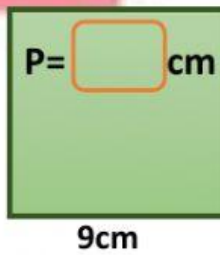


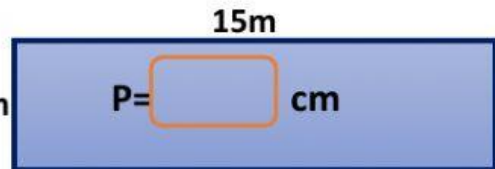
NOMBRE: _____

FECHA: _____

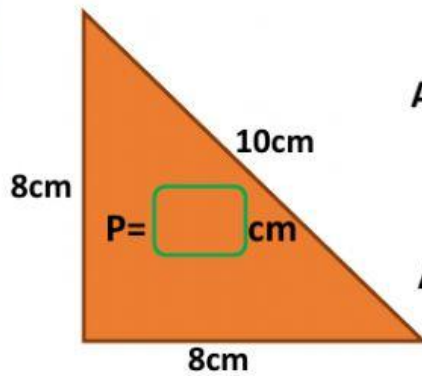
Halla el perímetro y el área de cada una de las siguientes figuras.



$$A = \square \square$$
$$A = \square \times \square$$
$$A = \square \square$$



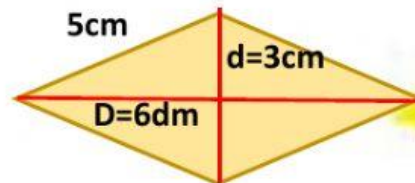
$$A = \square \square$$
$$A = \square \square$$
$$A = \square \text{ m}^2$$



$$A = \frac{\square \square}{\square}$$
$$A = \frac{\square \square}{\square}$$

$$A = \square \square$$

$$A = \frac{\square \square}{\square}$$



$$P = \square \text{ cm}$$

$$A = \frac{\square \square}{\square}$$

$$A = \square \text{ cm}^2$$

