



Name \_\_\_\_\_






Science – Weekly test

Write the correct force being used in the pictures below. (**squeeze** or **twist** )

	<hr/>
	<hr/>
	<hr/>
	<hr/>



Select the force being used in the pictures below

	<input checked="" type="radio"/> push <input type="radio"/> pull
	<input checked="" type="radio"/> push <input type="radio"/> pull
	<input type="radio"/> push <input checked="" type="radio"/> pull
	<input type="radio"/> push <input checked="" type="radio"/> pull
	<input checked="" type="radio"/> push <input type="radio"/> pull

Select the correct answer

A force can be

- 1) a push, a pull, a squeeze or twist.
- 2) a push, a breeze, a twist or squeeze.
- 3) a pull, a pull, a twist or squeeze