









Nombre: _____

Figuras Musicales (I)

Ejercicio

			
			
4 T	2 T	1 T	1/2 T

¿Qué duración tienen la suma de las siguientes figuras musicales?:

$$\text{Quarter note} + \text{Quarter note} = \boxed{3}$$

$$\text{Whole note} + \text{Half note} + \text{Quarter rest} = \boxed{}$$

$$\text{Half note} + \text{Half note} = \boxed{}$$

$$\text{Quarter note} + \text{Eighth note} + \text{Eighth rest} = \boxed{}$$

$$\text{Eighth note} + \text{Eighth note} = \boxed{}$$

$$\text{Half note} + \text{Half rest} + \text{Quarter rest} = \boxed{}$$

$$\text{Quarter note} + \text{Quarter rest} = \boxed{}$$

$$\text{Quarter rest} + \text{Eighth rest} + \text{Eighth rest} = \boxed{}$$

$$\text{Quarter note} + \text{Eighth note} = \boxed{}$$

$$\text{Eighth rest} + \text{Half note} + \text{Whole note} = \boxed{}$$

$$\text{Quarter rest} + \text{Eighth rest} = \boxed{}$$

$$\text{Half note} + \text{Eighth note} + \text{Eighth note} = \boxed{}$$

$$\text{Half note} + \text{Quarter rest} = \boxed{}$$

$$\text{Beamed eighth notes} + \text{Half note} + \text{Half rest} = \boxed{}$$

$$\text{Quarter rest} + \text{Half rest} = \boxed{}$$

