











Section I - Note Names & Values (20 pts)

In the first blank (a), please write the **name** of each of the given **notes** or **rests**. In the second blank (b), write down **how many beats** or **how much of a beat** the note or rest gets in common time (4/4). The first one has been done for you as an example.

- | | | | |
|-----|---|------------------------|------------------|
| 1. |  | a. <u>quarter note</u> | b. <u>1 beat</u> |
| 2. |  | a. _____ | b. _____ |
| 3. |  | a. _____ | b. _____ |
| 4. |  | a. _____ | b. _____ |
| 5. |  | a. _____ | b. _____ |
| 6. |  | a. _____ | b. _____ |
| 7. |  | a. _____ | b. _____ |
| 8. |  | a. _____ | b. _____ |
| 9. |  | a. _____ | b. _____ |
| 10. |  | a. _____ | b. _____ |