
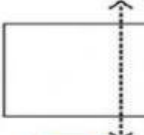
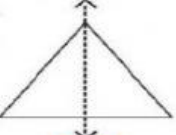
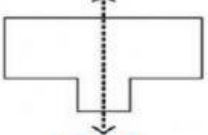
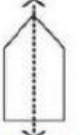
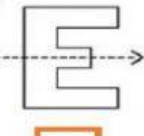
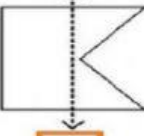
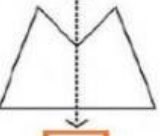

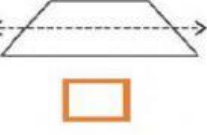
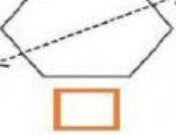
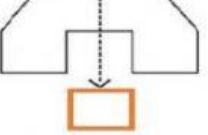
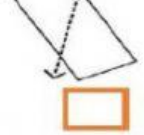


COLEGIO FREINET DEPARTAMENTO DE MATEMÁTICAS		F.AC-GC 004 V04 01/08/2017	
ASIGNATURA MATEMÁTICAS	DOCENTE CATALINA GUZMÁN B.	GRADO 1° E. B. P	

TALLER DE SIMETRÍA

Selecciona las figuras que tienen bien trazado el eje de simetría

<p>a.</p>  <input style="margin-left: auto; margin-right: auto;" type="checkbox"/>	<p>b.</p>  <input style="margin-left: auto; margin-right: auto;" type="checkbox"/>	<p>c.</p>  <input style="margin-left: auto; margin-right: auto;" type="checkbox"/>	<p>d.</p>  <input style="margin-left: auto; margin-right: auto;" type="checkbox"/>
<p>e.</p>  <input style="margin-left: auto; margin-right: auto;" type="checkbox"/>	<p>f.</p>  <input style="margin-left: auto; margin-right: auto;" type="checkbox"/>	<p>g.</p>  <input style="margin-left: auto; margin-right: auto;" type="checkbox"/>	<p>h.</p>  <input style="margin-left: auto; margin-right: auto;" type="checkbox"/>
<p>i.</p>  <input style="margin-left: auto; margin-right: auto;" type="checkbox"/>	<p>j.</p>  <input style="margin-left: auto; margin-right: auto;" type="checkbox"/>	<p>k.</p>  <input style="margin-left: auto; margin-right: auto;" type="checkbox"/>	<p>d.</p>  <input style="margin-left: auto; margin-right: auto;" type="checkbox"/>

¿Cuáles de las siguientes imágenes son simétricas? selecciónalos

