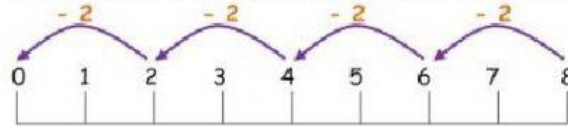


Mathematics Worksheet

Division - Repeated Subtraction (1)

Division sums can be worked out using **repeated subtraction**.

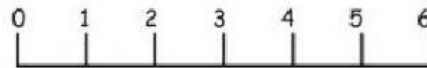
e.g. $8 \div 2 = \underline{\quad}$ This sum is asking how many times can 2 be taken away from 8.



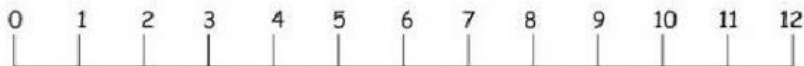
$8 \div 2 = 4$, because 2 can be taken away from 8, four times.

Work out these division sums using repeated subtraction. The number lines have been drawn to help you.


1) $6 \div 2 = \underline{\quad}$



2) $12 \div 3 = \underline{\quad}$



3) $10 \div 5 = \underline{\quad}$



4) $10 \div 2 = \underline{\quad}$



5) $12 \div 4 = \underline{\quad}$

