

Lines and angles

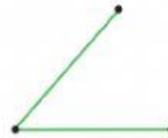
Grade V

Match the following by writing the correct number in front of the figure.


1. Line segment



2. Line



3. Parallel lines



4. Intersecting lines



6. Right angle



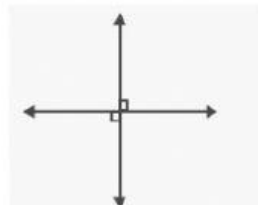
7. Ray



8. Acute angle



9. Straight angle



10. Perpendicular lines

