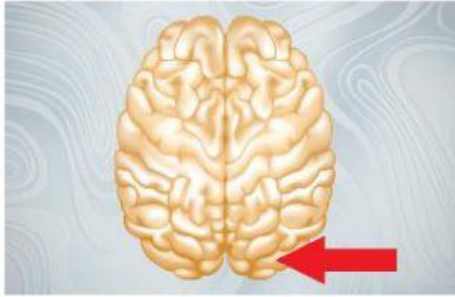


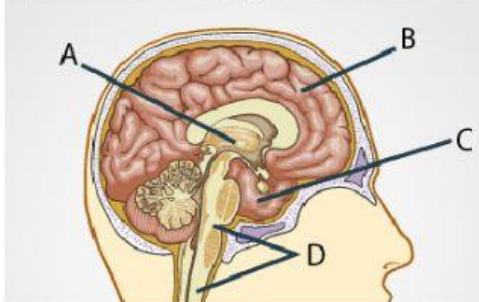
Name: \_\_\_\_\_ Per: \_\_\_\_\_ # \_\_\_\_\_

1) \_\_\_\_\_ In the diagram below, which lobe is located at the posterior (back) section of the brain, as indicated by the red arrow?



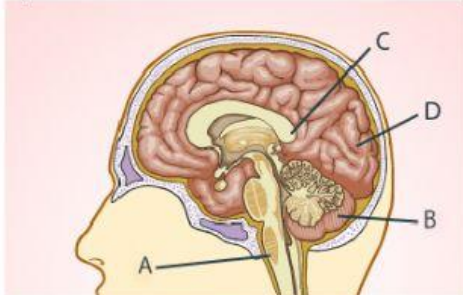
- A. frontal lobe
- B. occipital lobe
- C. parietal lobe
- D. temporal lobe

2) \_\_\_\_\_ In the diagram below, which area of the brain is indicated by the letter D?



- A. cerebrum
- B. parietal lobe
- C. brain stem
- D. cerebellum

3) Which structure is found directly below the pons and is indicated by the letter A?



- A. cerebellum
- B. occipital lobe
- C. temporal lobe
- D. medulla oblongata

4) Which of the following structures of the brain is visible in the diagram below?



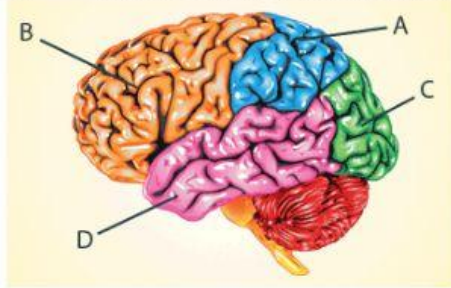
- A. brain stem
- B. cerebrum
- C. medulla oblongata
- D. cerebellum

5) In the diagram below, which structure is represented by the letter C?



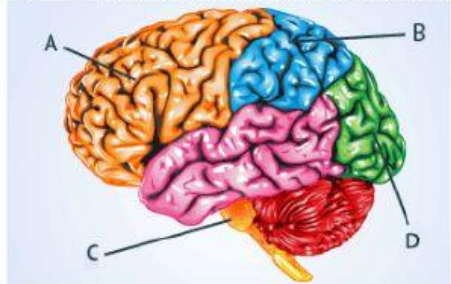
- A. cerebrum
- B. cerebellum
- C. medulla oblongata
- D. pons

- 6) In the diagram below, which lobe of the brain is indicated by the letter B?



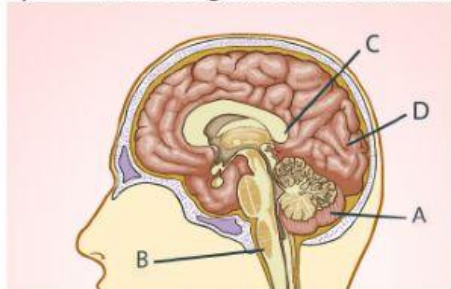
- A. temporal lobe
- B. occipital lobe
- C. parietal lobe
- D. frontal lobe

- 7) Which of the following structures is indicated by the letter C on the diagram below?



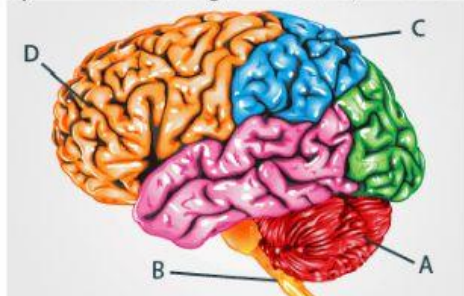
- A. brain stem
- B. cerebellum
- C. cerebrum
- D. pons

- 8) In the diagram of the brain shown below, which area correctly indicates the occipital lobe?



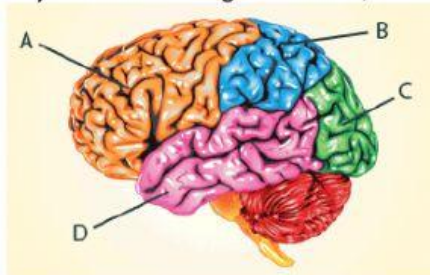
- A. Area A
- B. Area B
- C. Area C
- D. Area D

- 9) In the diagram below, which area is indicated by the letter C?



- A. cerebellum
- B. frontal lobe
- C. medulla oblongata
- D. parietal lobe

- 10) On the diagram below, in which area would you find the temporal lobe?



- A. Area A
- B. Area B
- C. Area C
- D. Area D