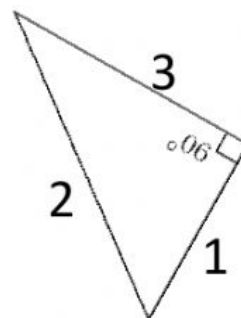
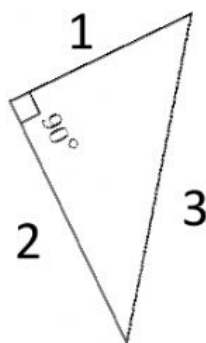
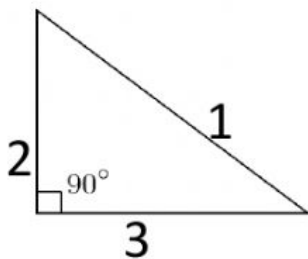
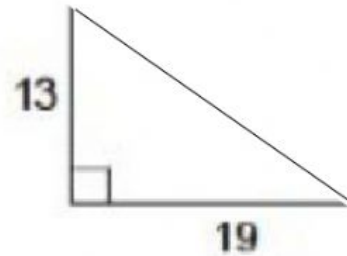
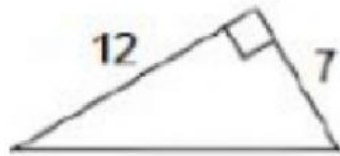
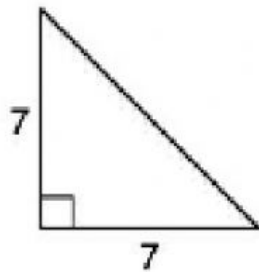


Which side length is the hypotenuse?



How do you know?

Use Pythagorean Theorem to find the hypotenuse of the triangles below. Show your work. Round to the nearest whole number.



Find the missing Side Length. Show your work. Round to the nearest whole number.

