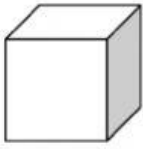


Name: _____

Time and 3D Shapes

A) Choose the 3D shapes.



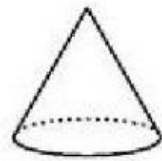
Cube

Sphere



Cylinder

Cone



Cone

Sphere

B) Choose the times.




3 O'clock

5 O'clock



7 O'clock

10 O'clock



4 O'clock

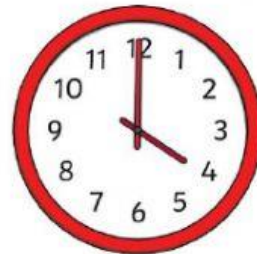
9 O'clock

C) Choose True or False.



It is a sphere

True False



It is 6 o'clock

True False

D) Choose the correct word answer.

Bob plays football at the time on the clock.

What time does Bob play football?



A) Bob plays football at 1 o'clock.

B) Bob plays football at 8 o'clock.

Bob goes to sleep at the time on the clock.

What time does Bob go to sleep?



A) Bob goes to sleep at 10 o'clock.

B) Bob goes to sleep at 11 o'clock.

