






































Sea Animals Seen at the Seashore

Crab	         
Squid	              
Starfish	     
Fish	   

- 8 How many crabs are there?
- 9 How many squid are there?
- 10 How many starfish are there?
- 11 How many fish are there?
- 12 Which sea animal is seen most often?
- 13 Which sea animal is seen least often?
- 14 Are there more squid or fish?
How many more?
- 15 Are there fewer starfish or crabs?
How many fewer?