




# BAHAGI

## Aktiviti 1 /

1 Kumpulkan objek. Tulis bilangan kumpulan.

**a** Dua-dua.



kumpulan dua-dua.

**b** Tiga-tiga.




kumpulan tiga-tiga.

**c** Enam-enam.



kumpulan enam-enam.


**d** Lapan-lapan.




kumpulan lapan-lapan.

2 Tulis bilangan dalam setiap kumpulan.

**a** 3 kumpulan sama banyak. **b** 2 kumpulan sama banyak.



Setiap kumpulan ada  kon aiskrim.

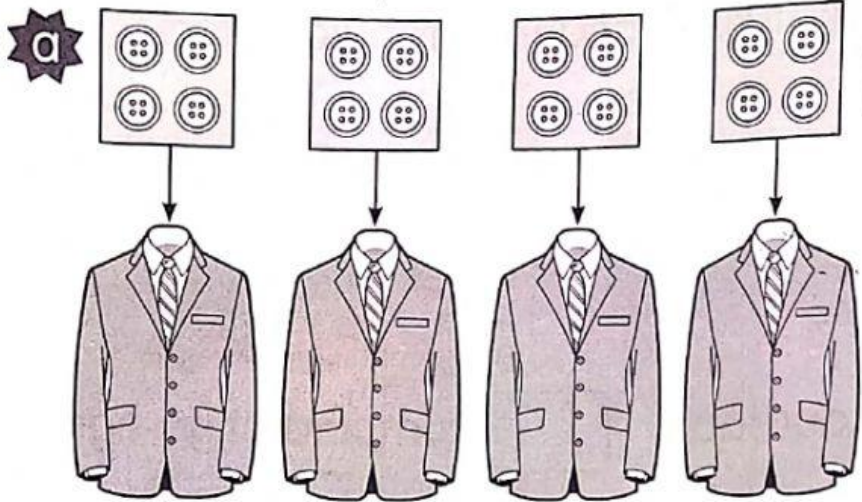


Setiap kumpulan ada  keping biskut.



## Aktiviti 2/

Lengkapkan ayat matematik dan cerita.

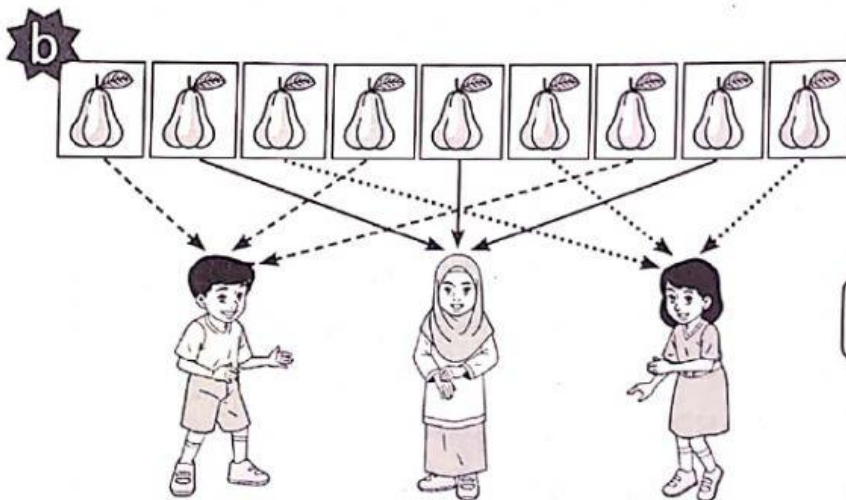


$$16 \div 4 = \square$$

Ada 16 biji butang.

Setiap kot ada  biji butang.

Ada  kot.



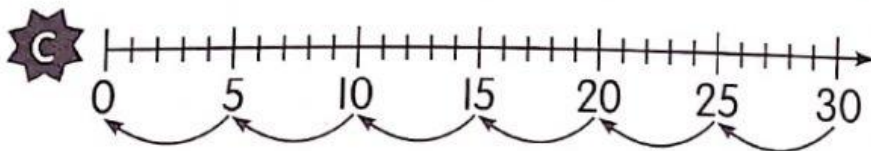
$$9 \div \square = \square$$

Ada 9 biji jambu dikongsi oleh

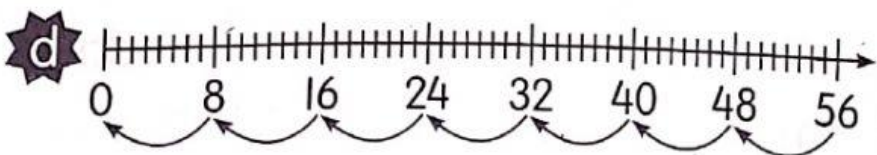
orang budak.

Setiap budak

dapat  biji jambu.



$$\square \div 5 = \square$$



$$\square \div \square = \square$$

