




Nome: _____

Professora: Luiza Helena

2º Ano

Matemática - Geometria

Assista ao vídeo e responda a atividade interativa ligando as figuras ao nome.



Triângulo

Circulo

Oval

Quadrado

Retângulo