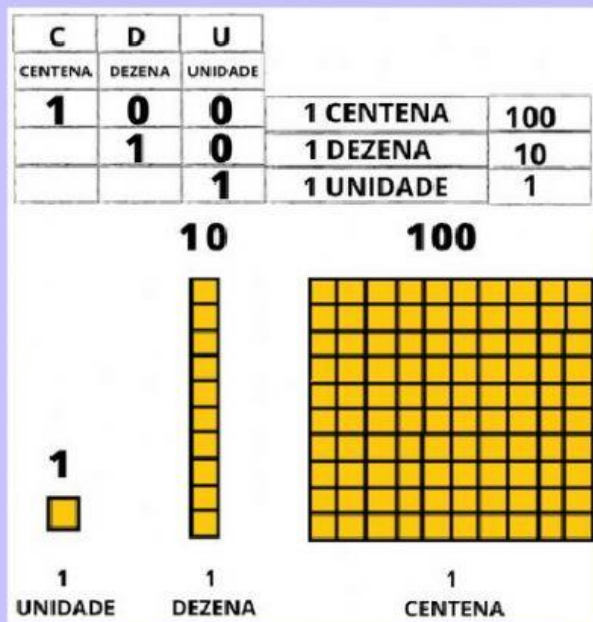



NOME:

DATA:

História com Mil Macacos

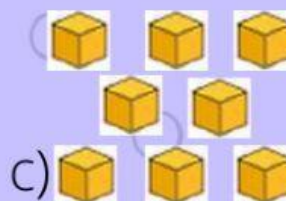
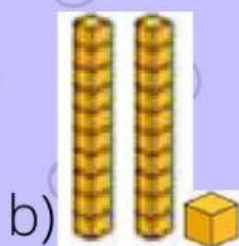


1- Quantos macacos o doutor Quaresma queria pedir ao seu amigo Jeremias?




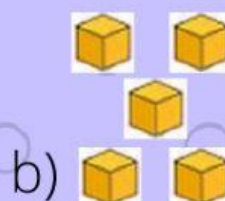
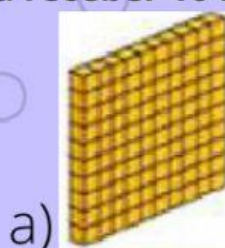
Resposta:

2- Quantos macacos o doutor Quaresma recebeu no primeiro dia?



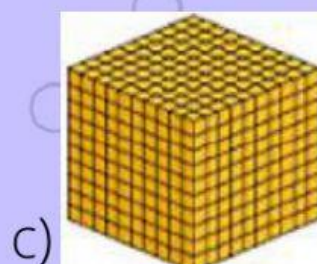
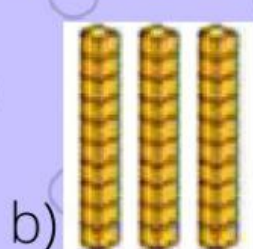

Resposta:

2- Se o doutor Quaresma receber 10 macacos por dia por 10 dias, quantos macacos ele receberia?



Resposta:

2- Como representamos mil macacos?



Resposta: