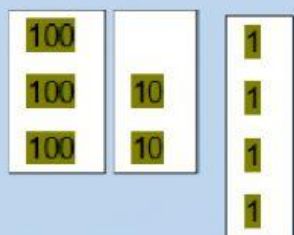


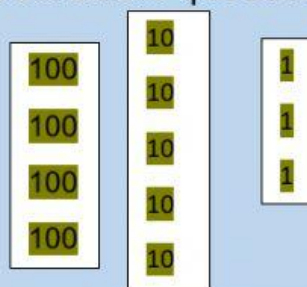
Ejercicio de Centenas, Decenas, Unidades

Nombre _____

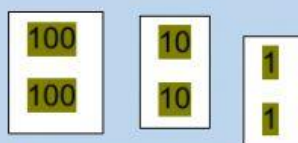
I. Completa la tabla de valores. Escribe el número que se forma.



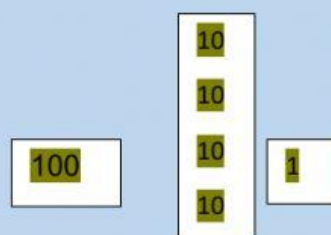
C	D	U



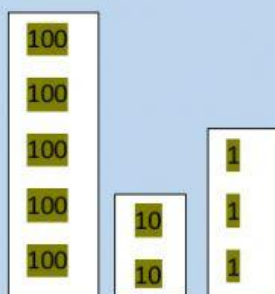
C	D	U



C	D	U



C	D	U



C	D	U
