

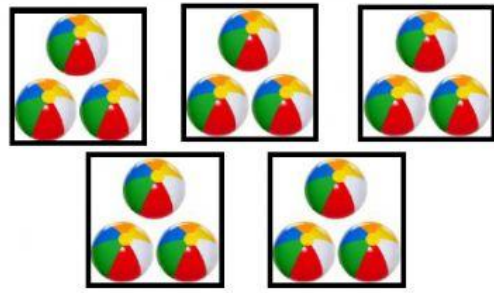





Homework: Fill in the missing number. Use the given example as reference.

 <p> $6 + 6 + 6 = 18$ $3 \times 6 = 18$ </p>	 <p> $_ + _ + _ + _ = _$ $_ \times _ = _$ </p>
 <p> $_ + _ + _ + _ + _ = _$ $_ \times _ = _$ </p>	 <p> $_ + _ + _ = _$ $_ \times _ = _$ </p>
 <p> $_ + _ + _ + _ + _ + _ = _$ $_ \times _ = _$ </p>	 <p> $_ + _ + _ = _$ $_ \times _ = _$ </p>