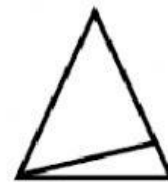



Identifying equal parts


Do a tick next to the shapes which are split equally.

Find all 7!


Triangles



Squares



Circles



Rectangles

