






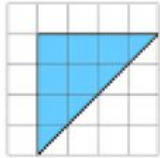
Name: _____

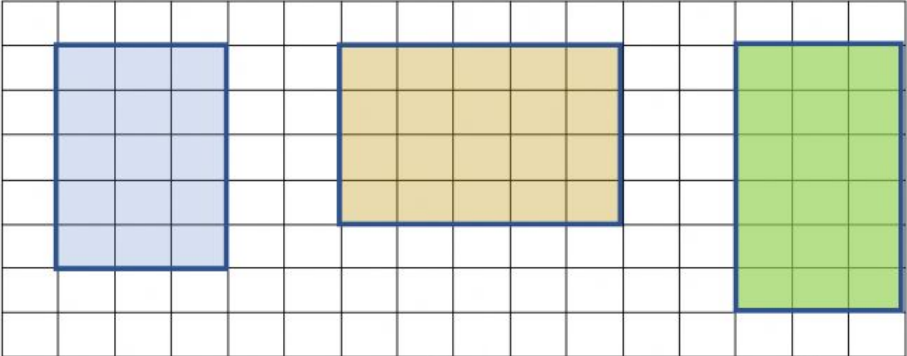
Mathematics 1

Term 3

Total – 25 marks

Answer each question on the line provided.

| No. | Item |
|-----|---|
| 1. | <p>Write in numerals: twenty- thousand, six hundred and fifty.</p> <p>Answer: _____ (1 mark)</p> |
| 2. | <p>Which of the two sacks has the lighter mass?</p> <div style="display: flex; justify-content: space-around; align-items: center;"> <div style="text-align: center;">  <p>1500g</p> </div> <div style="text-align: center;">  <p>2 ½ kg</p> </div> </div> <p>Answer: _____ (1 mark)</p> |
| 3. | <div style="display: flex; align-items: center; justify-content: center;"> <div style="border: 1px solid black; padding: 5px; margin: 0 10px;"> <p>Sold</p> <p>\$599</p> </div>  <div style="border: 1px solid black; padding: 5px; margin: 0 10px;"> <p>Bought</p> <p>\$485</p> </div> </div> <p>Calculate the profit made on the bicycle.</p> <p>Answer: _____ (2 marks)</p> |
| 4. | <p>Write these fractions in ascending order. (smallest to largest)</p> <div style="display: flex; justify-content: space-around; align-items: center; margin: 10px 0;"> $\frac{1}{2}$ $\frac{2}{8}$ $\frac{3}{4}$ </div> <p>Answer: _____ (3marks)</p> |
| 5. | <p>What is the area of each of the shape below? (3 marks)</p> <div style="display: flex; justify-content: space-around; align-items: flex-start;"> <div style="text-align: center;">  <p>_____</p> </div> <div style="text-align: center;">  <p>_____</p> </div> <div style="text-align: center;">  <p>_____</p> </div> </div> |

| | |
|----|---|
| 6. | <p>Jack has three books as shown in the grid below. He wants to place them in his bags starting from the largest first. Arrange these books in the correct order by writing the letters in the correct order on the line provided.</p> <div style="text-align: center;">  <div style="display: flex; justify-content: space-around; margin-top: 5px;"> A B C </div> </div> <p>Answer: _____ (3 marks)</p> |
| 7. | <p>Find the area of the following. (4 marks)</p> <div style="display: flex; justify-content: space-around; align-items: flex-start;"> <div style="text-align: center;"> <p>1.</p> <div style="border: 1px solid black; width: 120px; height: 60px; margin: 0 auto;"> <div style="position: absolute; top: -10px; left: 50%; transform: translateX(-50%);">12m</div> <div style="position: absolute; left: -10px; bottom: 0;">6m</div> </div> <p>_____</p> </div> <div style="text-align: center;"> <p>2.</p> <div style="border: 1px solid black; width: 80px; height: 80px; margin: 0 auto;"> <div style="position: absolute; top: -10px; left: 50%; transform: translateX(-50%);">8cm</div> </div> <p>_____</p> </div> </div> |
| 8. | <p>A piece of vinyl 1m^2 cost \$35. How much will it cost for a square piece of the same vinyl with side 6m. (2 marks)</p> <p>Answer: _____</p> |
| 9. | <p>The school court measures 25m by 12m. Barry walked around the court once.</p> <p>a) What distance did Barry walk? _____ (2marks)</p> <p>b) Kevin walked four times around the court. What distance did Kevin walk? _____ (2marks)</p> |

10. Write the correct analog time shown in each clock. (2 marks)

