



ALUNO(A):

TURMA:


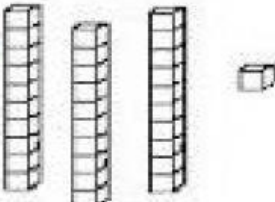


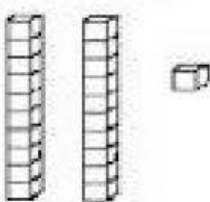


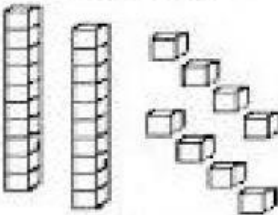








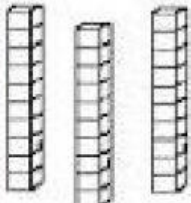


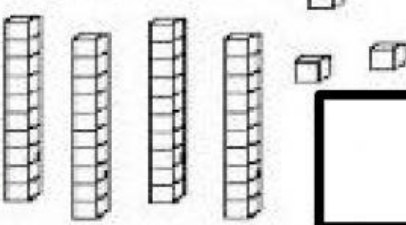


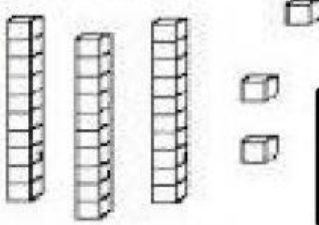

PROFESSORA:

1º ANO

# MATEMÁTICA

## TRABALHANDO COM MATERIAL DOURADO – QUEM JUNTA MAIS?

OBSERVE E CONTE A QUANTIDADE DE PEÇAS DE MATERIAL DOURADO QUE ALGUMAS CRIANÇAS CONSEGUIRAM JUNTAR NO JOGO *QUEM JUNTA MAIS*:

 <b>MARIA</b>  	 <b>GABRIEL</b>  
 <b>SAMUEL</b>  	 <b>HÉLEN</b>  
 <b>BRUNA</b>  	 <b>ANNY</b>  
 <b>EDUARDO</b>  	 <b>JULIA</b>  

43

33

20

30

28

21

31

18

# MATEMÁTICA

## TRABALHANDO COM MATERIAL DOURADO

VAMOS CONTAR E REGISTRAR A QUANTIDADE NOS QUADRINHOS?

