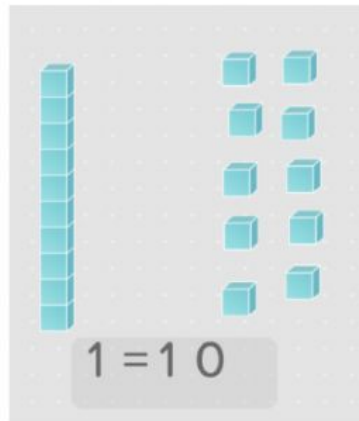


Level 1

Name _____ Date _____

1. Look at the picture. One ten has 10 ones. How many ones would you need to make 2 tens?



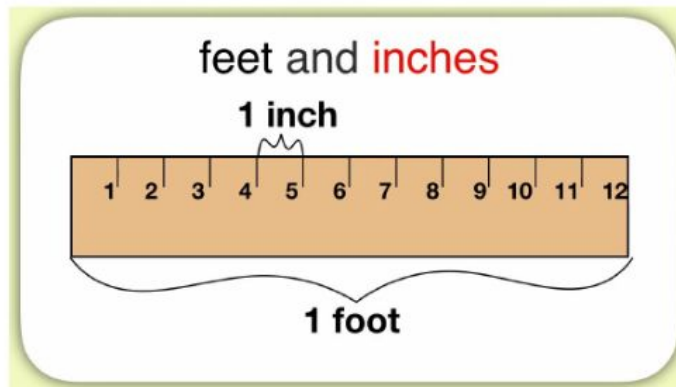
20

"Point to number 20"

"What is 10+10?"

"Touch the box that shows the number of ones to make 2 tens. "

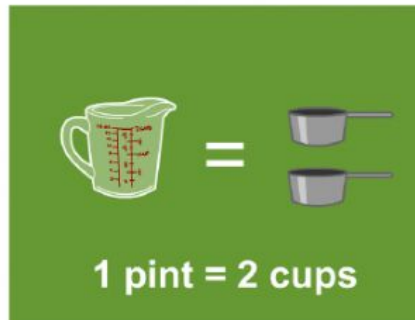
2. There are 12 inches in one foot. How many inches would be in 2 feet?



24 inches

*"Point to number 24."
"12+12=24. Where is the box that shows 24 inches?"*

3. Two cups of fluid make one pint. How many cups of fluid do you need to make 2 pints?



4 cups

*"Point to number 4."
"2+2=4. Where is the box that has number 4?"*

4. A whole pizza has 8 slices. How many slices will you get if you buy two whole pizzas?



16 slices

*"Point to number 8."
"8+8=16. Where is number 16?"*