




NAME : \_\_\_\_\_



DATE : 30 APRIL 2021

1) Write the fractions of the red coloured parts.

**a**  **b**  **c** 

Answer:  $\frac{\boxed{\phantom{00}}}{\boxed{6}}$       Answer:  $\frac{\boxed{1}}{\boxed{\phantom{00}}}$       Answer:  $\frac{\boxed{\phantom{00}}}{\boxed{\phantom{00}}}$

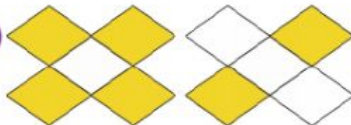
2) Write the fractions in words.

**a**  $\frac{1}{5}$   **b**  $\frac{1}{7}$  

3) Write the fractions in numerals.

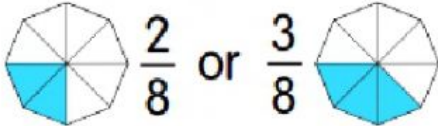
**a** one over five  $\frac{\boxed{1}}{\boxed{\phantom{00}}}$  **b** one over ten  $\frac{\boxed{1}}{\boxed{\phantom{00}}}$

4) Write more than or less than.

**a** 

$\frac{4}{5}$        $\frac{2}{5}$

$\frac{2}{5}$  is  $\frac{4}{5}$

  $\frac{2}{8}$  or  $\frac{3}{8}$

$\frac{\boxed{3}}{\boxed{8}}$  is  $\frac{\boxed{2}}{\boxed{8}}$