






### Position and Direction

				
Clockwise	Anticlockwise	Whole Turn	Half Turn	Quarter Turn

Pick the correct answer from the drop down box which describes how the Gruffalo has moved.

