


NOME: _____

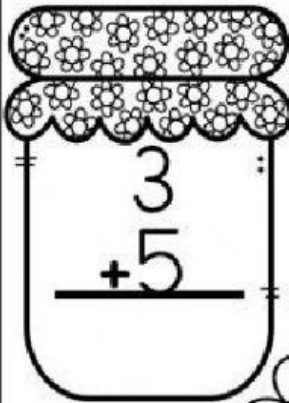
DATA: / /

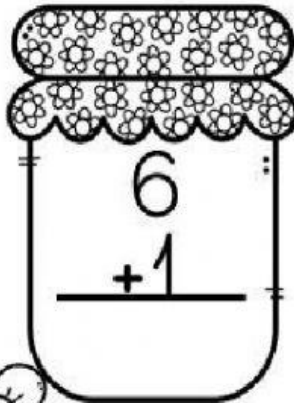


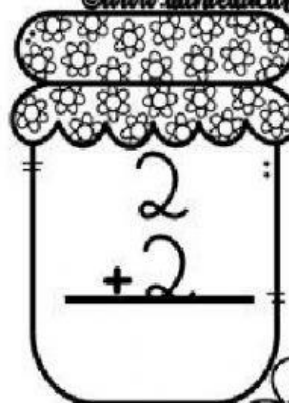
MATEMÁTICA

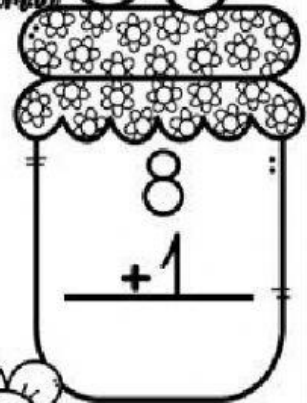
RESOLVA AS ADIÇÕES ABAIXO:

www.danieladucar.com.br

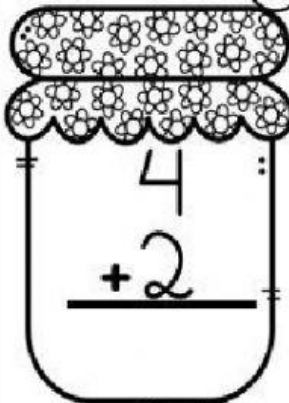

$$\begin{array}{r} 3 \\ +5 \\ \hline \end{array}$$

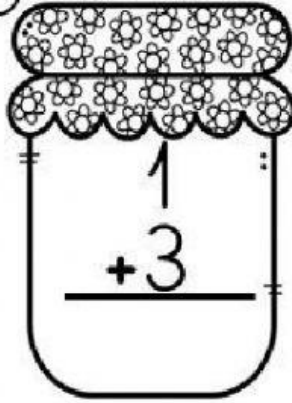

$$\begin{array}{r} 6 \\ +1 \\ \hline \end{array}$$

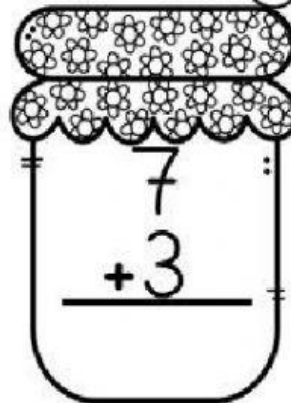

$$\begin{array}{r} 2 \\ +2 \\ \hline \end{array}$$

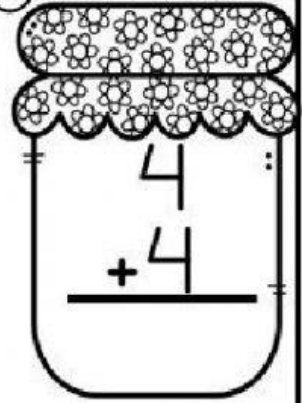

$$\begin{array}{r} 8 \\ +1 \\ \hline \end{array}$$




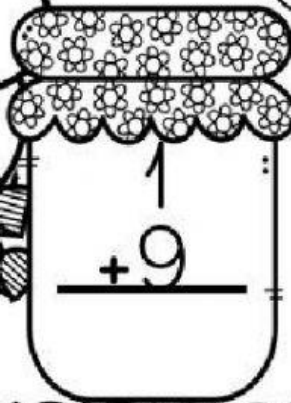

$$\begin{array}{r} 4 \\ +2 \\ \hline \end{array}$$

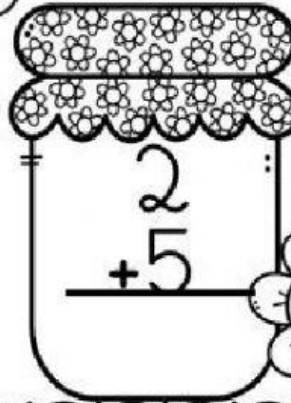

$$\begin{array}{r} 1 \\ +3 \\ \hline \end{array}$$

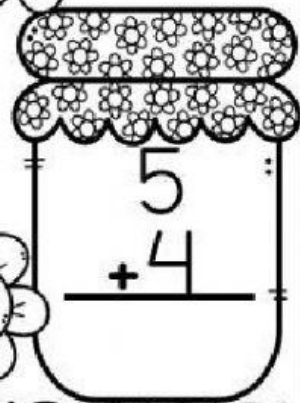

$$\begin{array}{r} 7 \\ +3 \\ \hline \end{array}$$


$$\begin{array}{r} 4 \\ +4 \\ \hline \end{array}$$




$$\begin{array}{r} 1 \\ +9 \\ \hline \end{array}$$



$$\begin{array}{r} 2 \\ +5 \\ \hline \end{array}$$


$$\begin{array}{r} 5 \\ +4 \\ \hline \end{array}$$



NOME: _____

DATA: / /



MATEMÁTICA

RESOLVA AS SUBTRAÇÕES ABAIXO:

$7-1=$

$5-2=$

$4-3=$

$9-6=$

$8-4=$

$7-1=$

$2-1=$

$6-2=$

$9-8=$

$3-3=$

$5-4=$

$8-7=$

$5-1=$

$4-2=$

$6-5=$

$2-2=$


ESCOLA: _____


TURMA: _____ DATA: ____/____/____


NOME: _____





1- Calcule as operações e escreva os resultados.



$$\begin{array}{r} +3 \\ +7 \\ \hline \end{array}$$



$$\begin{array}{r} +9 \\ +3 \\ \hline \end{array}$$



$$\begin{array}{r} +8 \\ +9 \\ \hline \end{array}$$



$$\begin{array}{r} +5 \\ +6 \\ \hline \end{array}$$


$$\begin{array}{r} +4 \\ +9 \\ \hline \end{array}$$


$$\begin{array}{r} +6 \\ +4 \\ \hline \end{array}$$


$$\begin{array}{r} +9 \\ +7 \\ \hline \end{array}$$


$$\begin{array}{r} +3 \\ +0 \\ \hline \end{array}$$


$$\begin{array}{r} +6 \\ +9 \\ \hline \end{array}$$



LIGUE AS SUBTRAÇÕES COM OS RESULTADOS CORRETOS

$2 - 1 =$

$6 - 3 =$

$7 - 5 =$

$8 - 4 =$

$9 - 1 =$

$10 - 5 =$

$5 - 5 =$

3

2

1

0

8

4

5

Aluno (a) _____ Turma 1º Ano
Prof. _____ Data ____/____/____

📖 Leia de depois escreva os algarismos. Veja o modelo.

Vinte e cinco	25	Vinte e nove	
Vinte e sete		Vinte e três	
Vinte e um		Vinte e oito	
Vinte e quatro		Vinte e seis	
Vinte e dois		Vinte	

📏 Siga o modelo.

2 dezenas e 1 unidade	21	vinte e um	_____
2 dezenas e 2 unidades			_____
2 dezenas e 3 unidades			_____
2 dezenas e 4 unidades			_____
2 dezenas e 5 unidades			_____
2 dezenas e 6 unidades			_____