

Name

Date

KNOW YOUR COINS









Listen to the coins then complete the grid below:

<u>COIN</u>		<u>NAME</u>		<u>VALUE</u>	
		penny		1 cent	= 1¢
		nickel		5 cents	= 5¢
		dime		10 cents	= 10¢
		quarter		25 cents	= 25¢

Coin				
Name				
Value				

MONEY MATCH TO \$1 SHEET 2

Draw a line to match the coins to the correct total of money.

	53¢
	30¢
	60¢
	55¢
	70¢
	48¢
	40¢
	45¢