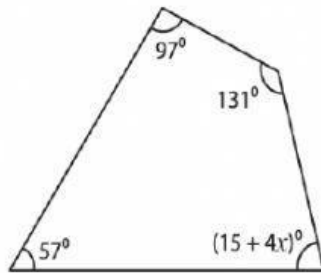


# Los Cuadriláteros

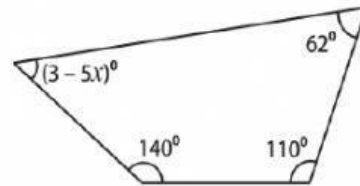
**Encuentra el valor de X en cada cuadrilátero**

1)



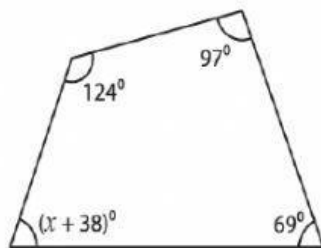
$x =$  \_\_\_\_\_

2)



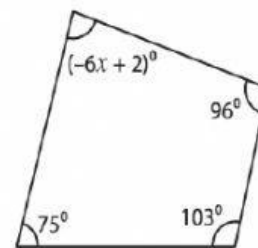
$x =$  \_\_\_\_\_

3)



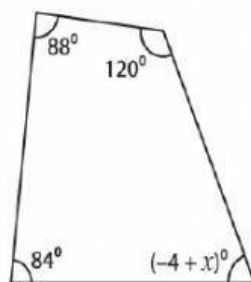
$x =$  \_\_\_\_\_

4)



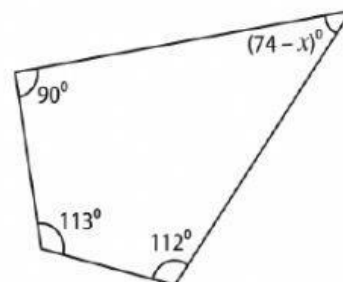
$x =$  \_\_\_\_\_

5)



$x =$  \_\_\_\_\_

6)



$x =$  \_\_\_\_\_