



Name: \_\_\_\_\_


Date: \_\_\_\_\_


## Quick check: 2 as a factor (cont.)

1. Tick (✓) the correct multiplications.

☐   $2 \times 3 = 5$

☐   $2 \times 3 = 6$

☐   $2 \times 6 = 12$

☐   $2 \times 6 = 8$

Write the missing numbers.

2.  $2\text{dm} \times 4 = \underline{\hspace{2cm}}$

3.  $2\text{kg} \times 8 = \underline{\hspace{2cm}}$

Write the missing numbers.

4.  $2 \xrightarrow{\times 3} \boxed{\phantom{00}} \xrightarrow{+36} \boxed{\phantom{00}}$

5.  $2 \xrightarrow{\times 7} \boxed{\phantom{00}} \xrightarrow{+10} \boxed{\phantom{00}}$

Compare.

6.  $2 \times 4 \boxed{\phantom{00}} 2 + 2 + 2 + 2$

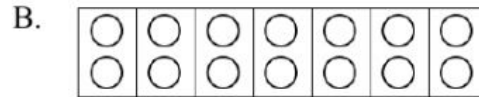
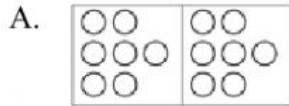
7.  $2 \times 7 \boxed{\phantom{00}} 8 + 8$

8. Choose the correct model, then write the sentence and answer.

There are 7 dishes.

Each dish has 2 apples.

How many apples are there on the dishes?



Number sentence: \_\_\_\_\_  \_\_\_\_\_ = \_\_\_\_\_

Word answer: \_\_\_\_\_

9\*. Solve the problem.

Three students: Hung, Nam, Hai go to the bookstore.

Each student buys 1 black pen and 1 purple pen.

How many pens do three students buy in all?

Answer: Three students buy \_\_\_\_\_ pens in all.