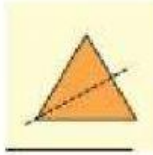


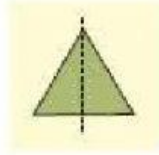
KENDRIYA VIDYALAYA BAIKUNTHPUR  
CLASS 3 SESSION 2021-22  
CH-1 WHERE TO LOOK FROM?  
WORKSHEET

**Mirror Halves**

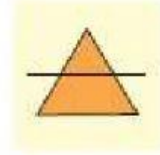
Look at the pictures given below. Does the dotted line divide each picture into two similar mirror halves? Write YES or NO below each picture.



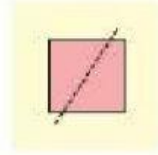
\_\_\_\_\_



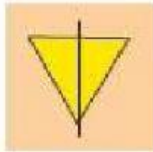
\_\_\_\_\_



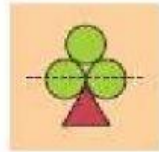
\_\_\_\_\_




\_\_\_\_\_




\_\_\_\_\_



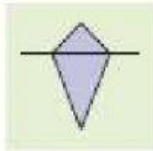
\_\_\_\_\_



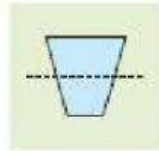
\_\_\_\_\_



\_\_\_\_\_



\_\_\_\_\_



\_\_\_\_\_



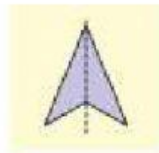
\_\_\_\_\_



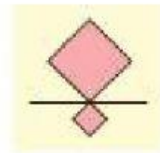
\_\_\_\_\_



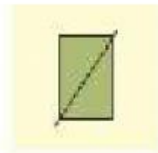
\_\_\_\_\_



\_\_\_\_\_



\_\_\_\_\_



\_\_\_\_\_