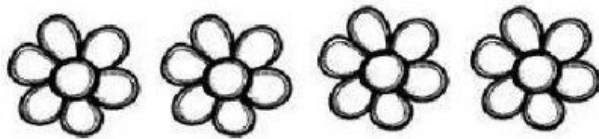


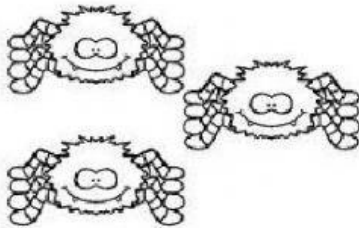
# Picture Subtraction



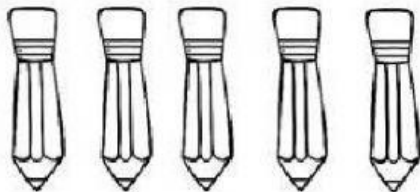
$3 - 1 = \square$



$4 - 2 = \square$



$3 - 3 = \square$



$5 - 2 = \square$





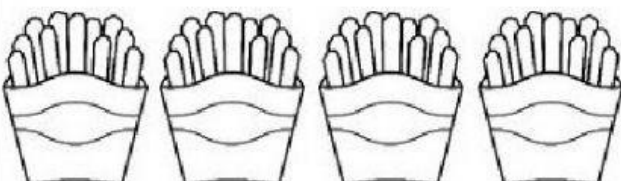
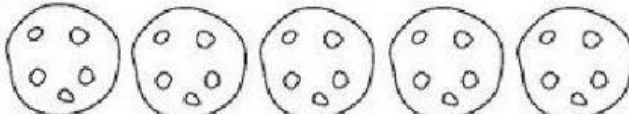


$5 - 4 = \square$

Name \_\_\_\_\_

# Junk Food Subtraction

Directions: Solve the junk food subtraction problems by crossing out the amount to be subtracted. Write the answers on the lines.

	$4 - 2 = \underline{\quad}$
	$5 - 3 = \underline{\quad}$
	$3 - 1 = \underline{\quad}$
	$2 - 2 = \underline{\quad}$
	$4 - 2 = \underline{\quad}$
	$5 - 2 = \underline{\quad}$