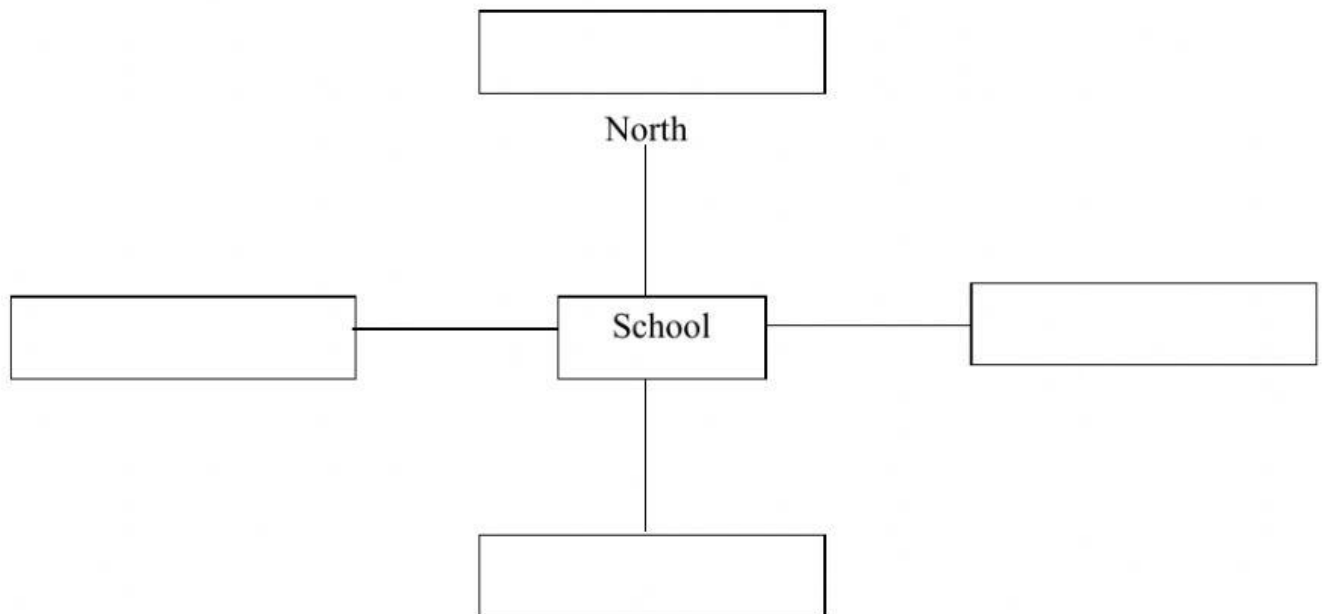
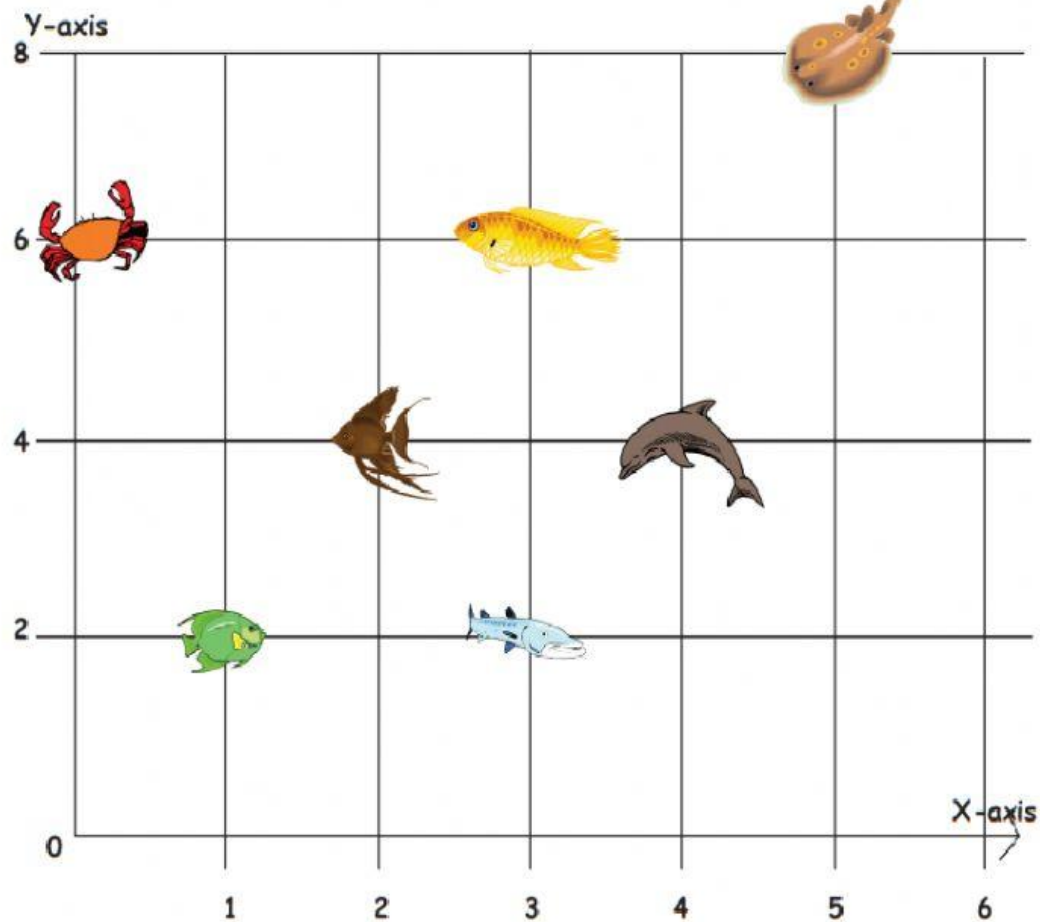


Answer the question based on the instruction given.







1. My brother is facing south. He turns one right angle clockwise. Which direction is he facing now?
2. Father is driving in the east direction. He turns right. Which direction is he facing now?
3. Sultan is facing south. He turn two right angle clockwise. Which direction is he facing now?
4. After turning two right angle clockwise, Lisa ends up facing west. Which direction was she facing at the first?
5. Nana is standing at the school. Write “Library”, “Field”, “Minimarket” and “Music Studio” in the correct boxes. Use the clues below help you
 - Nana is facing the Field.
 - The Field is north of the school.
 - She turn left and sees the Library in front of her.
 - She turns two right angles clockwise again and sees the Minimarket in front of her.



The graph is a representation of the position of aquatic species.



Find the position in (XY) axis of the following:

					
<input type="text"/>	<input type="text"/>	<input type="text"/>	<input type="text"/>	<input type="text"/>	<input type="text"/>

Example : Crab = 0,6

