



Spring Hill International School

Quiz no.7

Scholastic Year 2020/ 2021

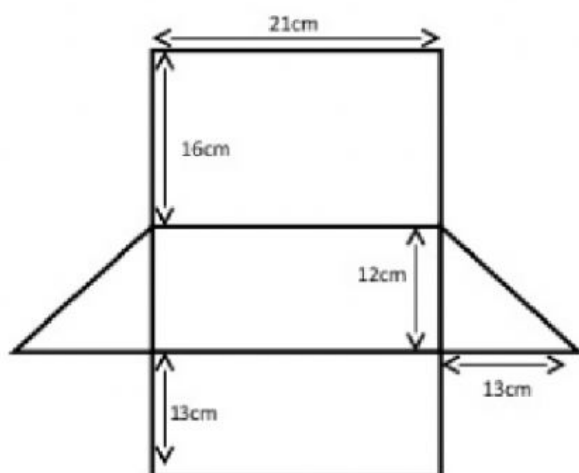
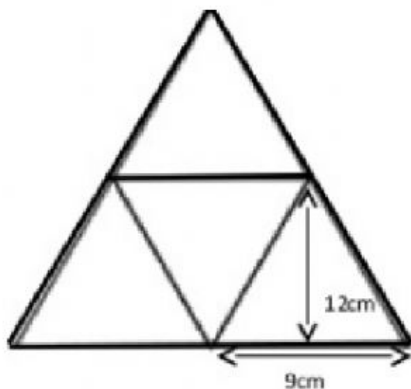
Student's Name:

Class & Section: Grade 7

Teacher's Name: Raghda Ziad

Date: 27/ April / 2021

Question no.1: Calculate the surface area for the following shapes (must show your work)



Question no.2: **Volume riddles**

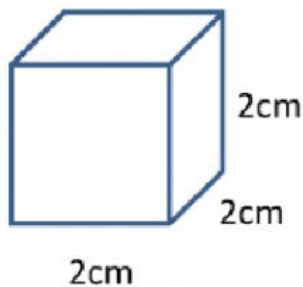
- 1) • I am not a cube.
• I am less than 5cm high.
• My volume is more than 14cm^3 .
• My length and width are the same.
• Who am I?

Answer ____

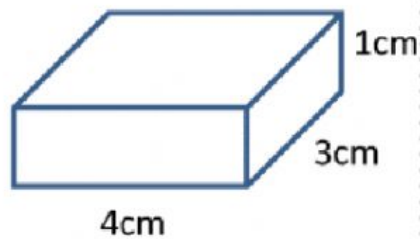
- 2) • I am more than 1cm high.
• I have at least one square face.
• My volume is less than 20cm^3 .
• Only two of my dimensions are the same.
• Who am I?

Answer ____

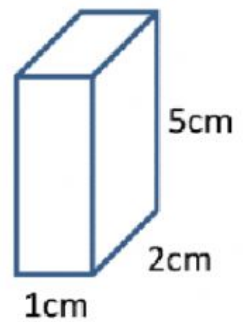
A



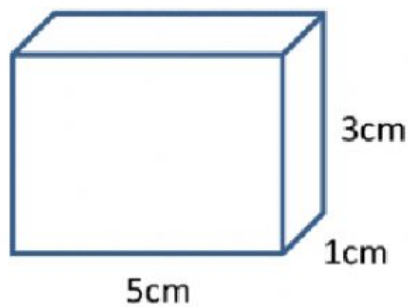
B



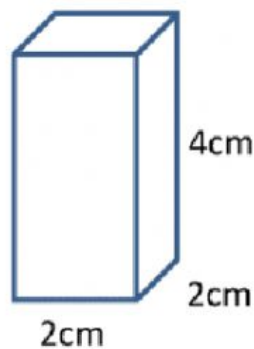
C



D



E



F

