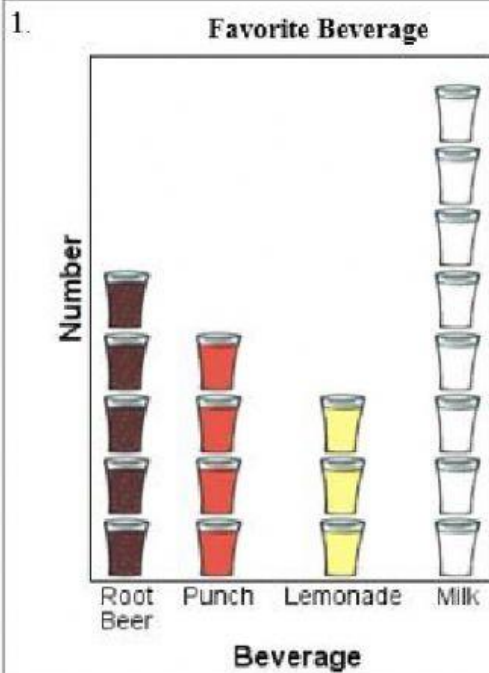


NAME: _____

DATE: _____

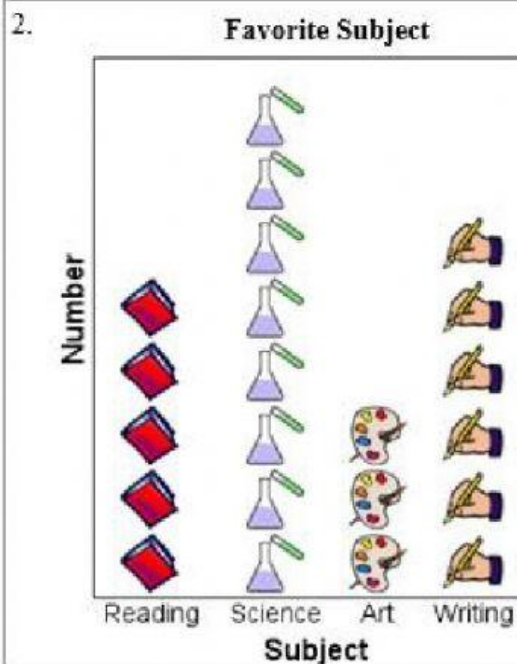
Use the picture graph to answer the questions.



a. List the beverages in order from the beverage with the most votes to the beverage with the fewest votes.

b. What is the least popular beverage?

c. How many more people chose milk than chose root beer?



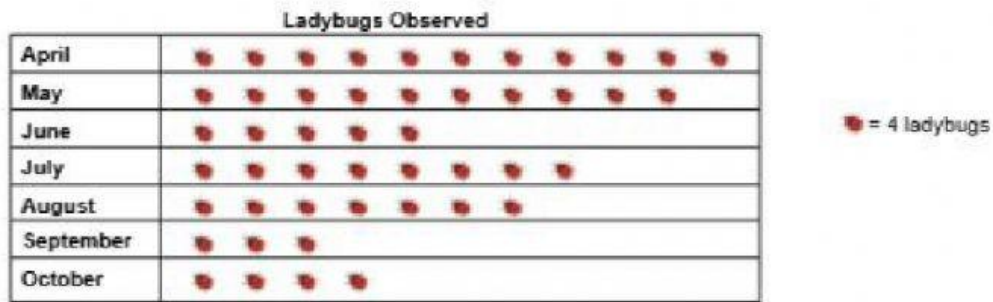
a. How many people chose either reading or science?

b. How many people chose reading as their favorite subject?

c. How many people answered the survey?

Interpreting Pictographs

John counted the number of ladybugs he spotted in his backyard for seven months. Answer the questions based on the pictograph below.



- 1) How many ladybugs were observed in the month of April? _____
- 2) How many ladybugs did John see during May? _____
- 3) For which month was John seeing the fewest ladybugs? _____
- 4) If in any one month John views at least 30 ladybugs, he will add one to his collection. Which months did John get to add a ladybug to his collection? If that never occurred, write 'None'. _____
- 5) Was John spotting more ladybugs in the month of August or in September? _____
- 6) In total, how many ladybugs did John see in the tracked months? _____
- 7) During which month did John spot the greatest number of ladybugs? _____