

SCIENCE YEAR 4 (UNIT 3 : BREATHING ORGAN OF ANIMALS)

INSTRUCTION : FILL IN THE BLANK WITH THE CORRECT ANSWER


UNIT **3** ANIMALS

THEME: Life Science


PBD MODULE DSKP PRACTICE

Breathing Organs of Animals


I. The diagram below shows four animals. LS3.1.1



S



T



U



V

(a) State the breathing organs of the animals.

Q11

S: \_\_\_\_\_

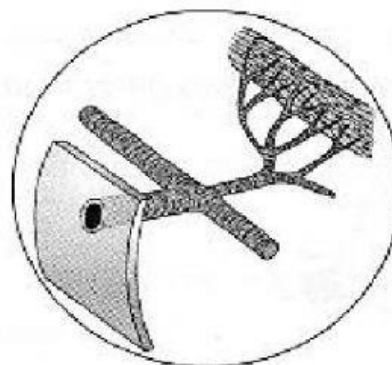
U: \_\_\_\_\_

T: \_\_\_\_\_

V: \_\_\_\_\_

(b) The diagram below shows the breathing organ of an animal.

Q12



i. Name the breathing organ.

\_\_\_\_\_


ii. Name **one** example of animal that has this breathing organ.

\_\_\_\_\_

**SCIENCE YEAR 4 (UNIT 3 : BREATHING ORGAN OF ANIMALS)**

**INSTRUCTION : FILL IN THE BLANK WITH THE CORRECT ANSWER**

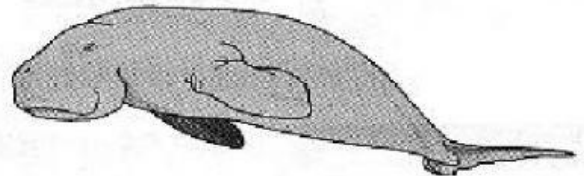
2. The diagram below shows some aquatic animals. LS3.1.2



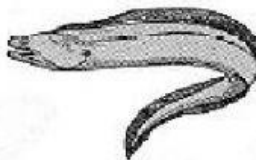
Crab




Turtle



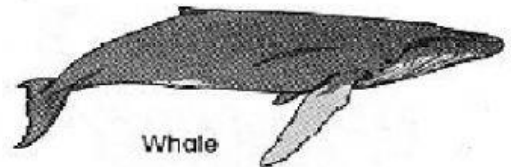
Dugong



Eel



Shark



Whale

- (a) i. Classify the above animals into two groups based on their breathing organs.

FL1

Group A: \_\_\_\_\_

Group B: \_\_\_\_\_

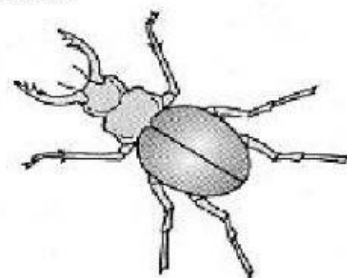
- ii. State the breathing organs of the animals in the groups

Group A: \_\_\_\_\_

Group B: \_\_\_\_\_

- (b) The diagram below shows two other animals.

FL1



- i. Can these two animals be classified in the group of the same way of breathing?

\_\_\_\_\_

- ii. Give your reason.

\_\_\_\_\_