

SCIENCE YEAR 4 (UNIT 3 : BREATHING ORGAN OF ANIMALS)

INSTRUCTION : FILL IN THE BLANK WITH THE CORRECT ANSWER




ACTIVITY ZONE

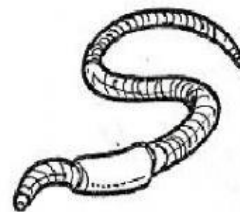
4.1 Breathing Organs of Animals

Textbook pages: 54 - 56


The diagram below shows the animals in a habitat. Each of the animals has different breathing organs. Identify the breathing organs of animals P, Q, R and S. **TP 1**



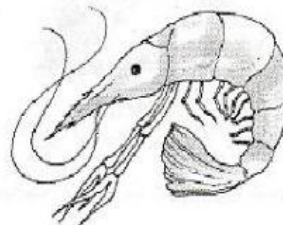
P: _____



Q: _____



R: _____



S: _____

Give **two** examples of animals for each breathing organ named in A. **TP 2**

P	Q	R	S
1.	1.	1.	1.
2.	2.	2.	2.

SCIENCE YEAR 4 (UNIT 3 : BREATHING ORGAN OF ANIMALS)

INSTRUCTION : FILL IN THE BLANK WITH THE CORRECT ANSWER

- C** Classify the animals below based on their breathing organs. **TP 3**

