


SCIENCE EXERCISE SET A



ENRICHMENT PRACTICE

A Answer the following questions.




1 The diagram below shows a situation in the kitchen. 



(a) What is the sense involved?

(b) What is the importance of the sense mentioned?

2 Rina covers her eyes as shown below.



Will Rina be able to guess the type of the fruit in the bowl without touching it? ☐ Yes ☐ No

Give reason.

SCIENCE EXERCISE SET B

B Fill in the blanks with the correct answer.

3

sense of smell

sense of hearing

sense of touch




Siti knows whether the drink is hot or cold through the

_____ even though her eyes are covered.



Ahmad can guess the fruits that are placed on the table through the



Ali can guess the object in Azmi's hand through the
