

Name: _____ Roll No : _____ Class : 1 Section : _____

Date :05 May 2021
Lesson Code:1M25




Counting & Number name (201- 225)

Revise the concepts from lesson (21-25) pdf then solve the worksheet. Send your score to






Q1: Complete the given counting series.

Q2: Fill in the missing letters and complete the number names.

	T _ _ h _ _ dre _ and thr _ _
	Two hund _ _ d and ni _ et _ _ n
	Two hundred and t _ ent _ f _ _ r

Q3: Look at the given number and fill in the blanks. Also write the number name.

	_____ Hundreds, _____ tens	Number name
	and _____ ones	
	_____ Hundreds, _____ tens	Number name
	and _____ ones	
	_____ Hundreds, _____ tens	Number name
	and _____ ones	