





# ELAPSED TIME – START TIME

## **HOMEWORK**

**4/29/2021**

1. Alaina went to a birthday party that ended at 7:17 p.m. The party lasted 4 hours and 47 minutes. What time did the party start?

a. 	b. 
c. 	d. 

2. Tyler's class arrived back at their school from a field trip to Yorktown at 3:19 p.m. They spent a total of 5 hours and 37 minutes away from school. At what time did the class leave school for their field trip?

a. 8:56 p.m.	b. 10:42 a.m.
c. 9:42 a.m.	d. 10:56 a.m.

3. Jayson and Kahmel went to a concert on Friday night. The concert ended at 11:12 p.m. The show lasted for 3 hours and 58 minutes. What time did the concert begin?

a. 7:14 p.m.	b. 8:14 p.m.
c. 2:10 p.m.	d. 3:10 p.m.