





For my birthday party I made fruit punch. I counted the number of fruits I used and made a tally chart. Use the information to answer the questions.

|   |  |  |  |  |  |                      |
|---|--|--|--|--|--|----------------------|
|  apples  |  |  |  |  |  | <input type="text"/> |
|  oranges |  |  |  |  |  | <input type="text"/> |
|  pears   |  |  |  |  |  | <input type="text"/> |
|  mangos  |  |  |  |  |  | <input type="text"/> |

How many apples did I use in the punch?

How many oranges did I use in the punch?

How many pears and mangos went in the fruit punch?

How many fruits did I use altogether?

If the mangos are \$20 per 10. How much were the mangos?

If I paid \$52 for the oranges. How much is each orange?

I cut each apple in 4 parts. How many apple parts were in the punch?