



 Manahej	Science Department	Quiz 3 / Term 2
	Name :	From a Seed to a Plant
	Grade 1	Score/ 5

Exercise 1:

A. Number, from 1 to 4, the steps of the bean seed germination.
(2pt)

			
<input type="text"/>	<input type="text"/>	<input type="text"/>	<input type="text"/>

B. Complete the sentence with the suitable term. (0.5pt)

- Germination allows the seed to give a .

Exercise 2 :

A. Observe the document then tick the figure that shows a germinating seed. **(1pt)**



Figure A




Figure B






Figure C



B. Choose the correct answer. **(1.5pt)**

- is missing (absent) in figure B.
- is missing (absent) in figure C.