

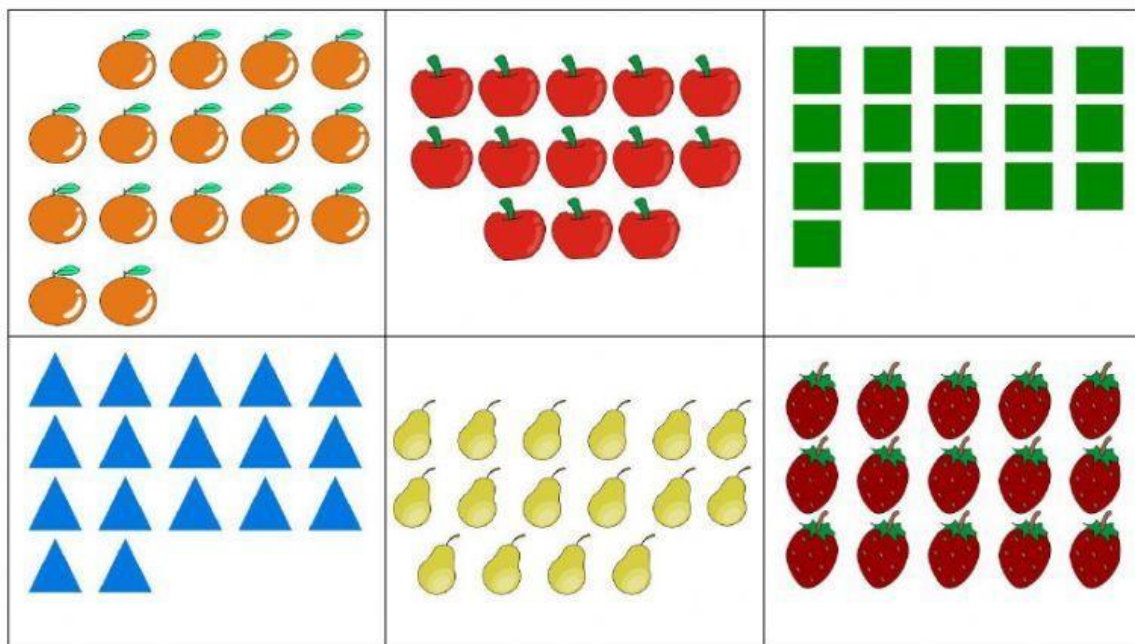
Friday 23rd April, 2021

Term 3

Weekly Test 1- Mathematics

1. Write the word name for 16. _____

2. Select all the sets with **sixteen** objects.



3. Fill in the missing facts.

$$\underline{\hspace{2cm}} - 10 = 6$$

$$16 - 8 = \underline{\hspace{2cm}}$$

$$4 + \underline{\hspace{2cm}} = 16$$

$$13 + \underline{\hspace{2cm}} = 16$$

16 is more than 14.

16 is more than 15.

4. Solve the following word problems.

Write your number sentence for all word problems.

1. Jermiyah loves animals. She has 5 turtles, 4 parrots and 7 dogs.

How many animals she has **in all**?

2. Rashad has 11 apples. Zachariah has 5 bananas.


a. How many fruits they have **altogether**?

b. How many more fruits does Rashad have than Zachariah?

Rashad has _____ more fruits than Zachariah.

5. Number the pictures (1,2,3,4) from the lightest to the heaviest.

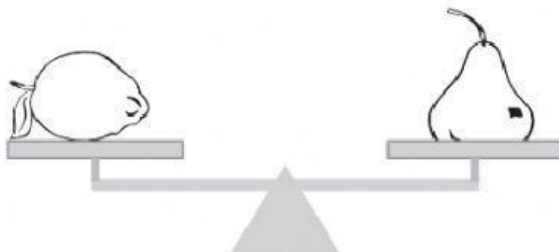




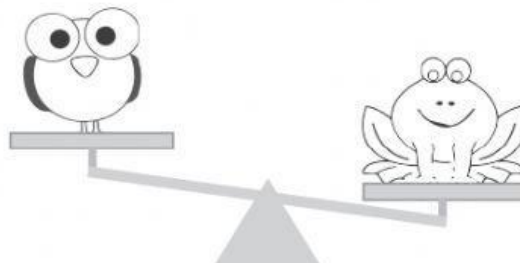
6. Look at the following scales and fill in the blanks with "heavier", "lighter" or "same as".



The apple weighs _____ than the strawberry.



The lemon weighs the _____ the pear.



The bird weighs _____ than the frog.