





ELAPSED TIME – END TIME

HOMEWORK

4/28/2021

1. Chloe arrived at the library to study at 7:36 a.m. She studied for 8 hours and 25 minutes. Which clock best represents the time Chloe left the library?

a. 	b. 
c. 	d. 

2. The Carr family is traveling to Florida for spring break. They will leave at 5:46 a.m. and are scheduled to arrive in Daytona Beach 9 hours and 9 minutes later. What time will the Carr family arrive at their destination?

a. 1:54 p.m.	b. 1:55 p.m.
c. 2:54 p.m.	d. 2:55 p.m.

3. Jayron had basketball practice at 5:30 p.m. Practice lasted for 2 hours and 37 minutes. What time did practice end?

a. 8:07 p.m.	b. 7:07 p.m.
c. 7:37 p.m.	d. 8:37 p.m.