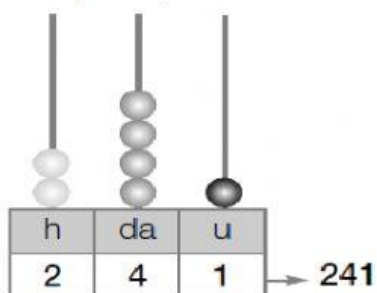


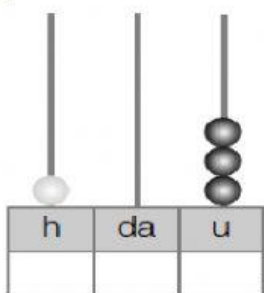
# Numeri... dopo il 100, ma prima del 1000

1. SCRIVI SOTTO A OGNI ABACO IL NUMERO RAPPRESENTATO, COMPETA COME NELL'ESEMPIO



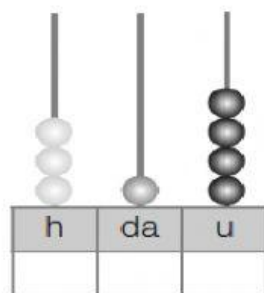
→ 241

$$200 + 40 + 1 = 241$$



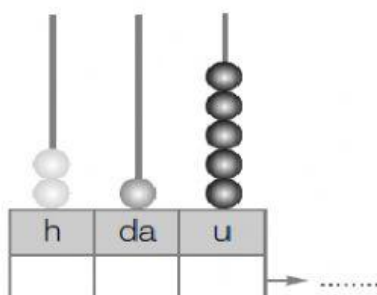
→ .....

$$..... = .....$$



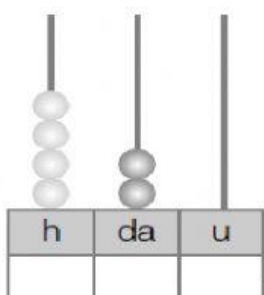
→ .....

$$..... = .....$$



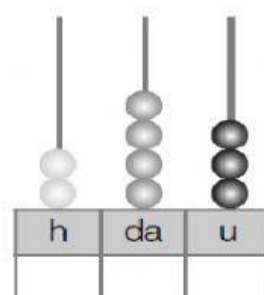
→ .....

$$..... = .....$$



→ .....

$$..... = .....$$



→ .....

$$..... = .....$$

2. REGISTRA LE QUANTITÀ RAPPRESENTATE CON I BLOCCHI LOGICI E COMPLETA, COME NELL'ESEMPIO.

