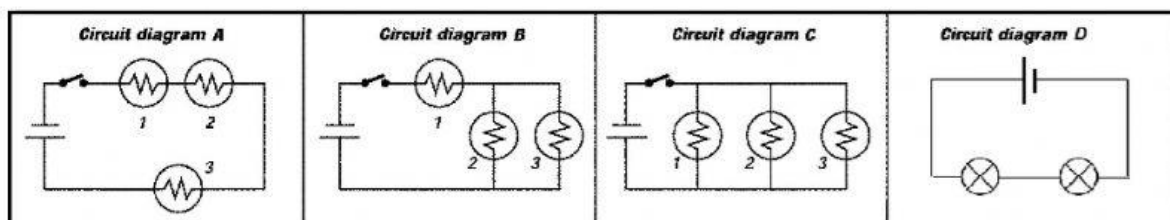


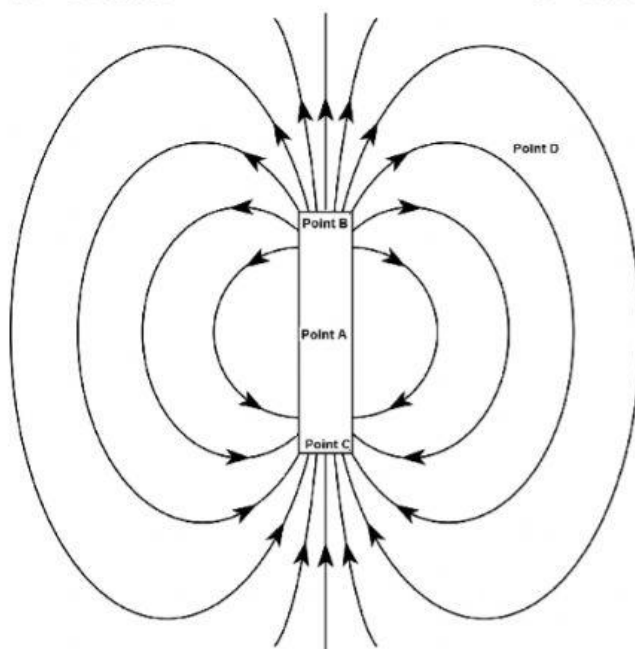
## Multiple Response

Identify one or more choices that best complete the statement or answer the question.

### Series and Parallel Circuits

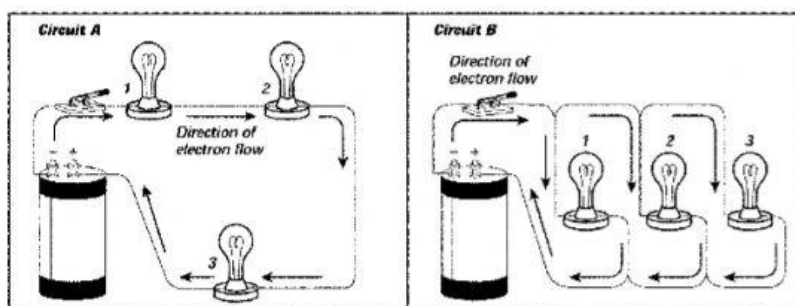


41. Which circuit or circuits have a switch? Pick all that apply.
- Circuit A
  - Circuit B
  - Circuit C
  - Circuit D
42. Which circuit or circuits are parallel? Pick all that apply.
- Circuit A
  - Circuit B
  - Circuit C
  - Circuit D
43. Which circuit or circuits are series? Select all that apply.
- Circuit A
  - Circuit B
  - Circuit C
  - Circuit D



44. At which point or points would the magnetic force be the weakest? Pick all that apply.
- Point A
  - Point B
  - Point C
  - Point D

### Series and Parallel Circuits



45. Pick all the statements that are true.
- Circuit B is a series circuit
  - Circuit B is a parallel circuit
  - Circuit A is a series circuit
  - Circuit A is a parallel circuit