

Name: _____

Grade: 2

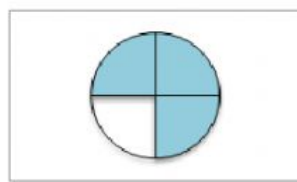
Subject: Mathematics

Topic: Fractions

Create your own proper fractions by writing the correct number of shaded parts.



2

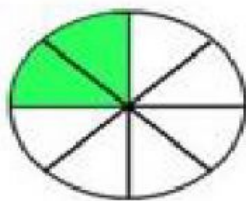


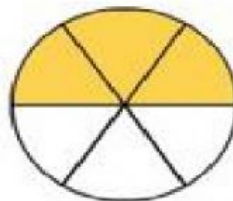
4

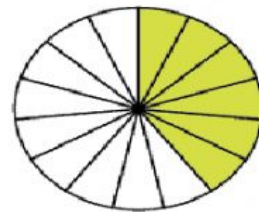


10

Write proper fractions for the shaded parts.







Circle all the Proper fractions.

$$\frac{5}{2}$$

$$\frac{9}{12}$$

$$\frac{5}{15}$$

$$\frac{12}{3}$$

$$\frac{2}{4}$$

A proper fraction is when the numerator is _____ than the denominator.

Select the correct name for each set of fractions.

$$\frac{2}{3}$$

$$\frac{3}{6}$$

$$\frac{5}{7}$$

$$\frac{16}{40}$$

UNIT FRACTIONS

PROPER FRACTIONS

$$\frac{1}{5}$$

$$\frac{1}{2}$$

$$\frac{1}{6}$$

$$\frac{1}{3}$$

UNIT FRACTIONS

PROPER FRACTIONS