















Math – Comparisons

How many more? How many fewer?

1. Look at the figures. Answer the questions


- How many **more**  than  are there?

_____ - _____ = _____

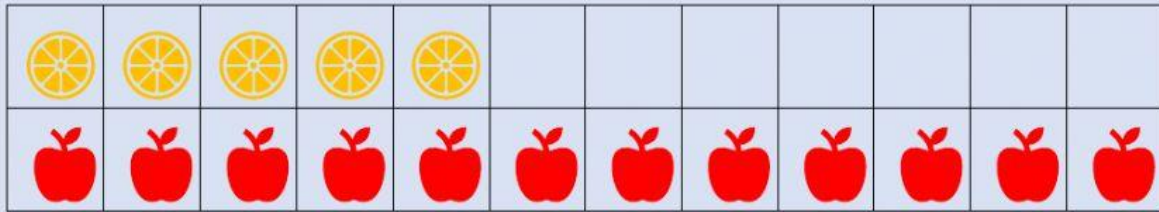
There are _____ more .

- How many **fewer**  than  are there?

_____ - _____ = _____

There are _____ fewer .

2. Look at the figures. Answer the questions



- How many **more**  than  are there?

_____ - _____ = _____



















There are _____ more .

- How many **fewer**  than  are there?

_____ - _____ = _____


There are _____ fewer .

3. Look at the figures. Answer the questions

- How many **more**  than  are there?

_____ - _____ = _____

There are _____ more .

- How many **fewer**  than  are there?

_____ - _____ = _____

There are _____ fewer .