

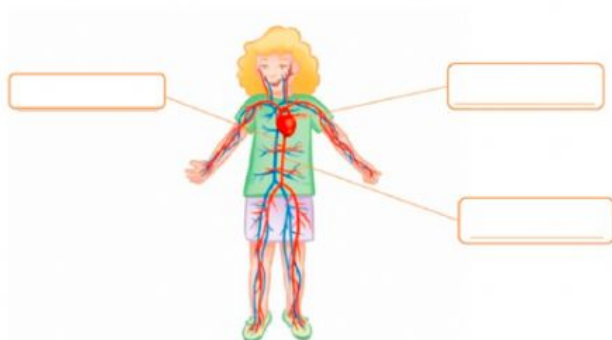
SCIENCE UNIT 2

3º Primaria

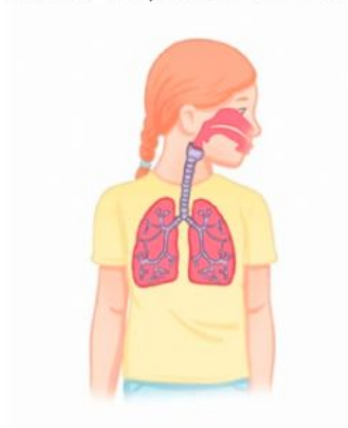
Name: _____ CLASS: _____

Date: _____

1. Label the picture

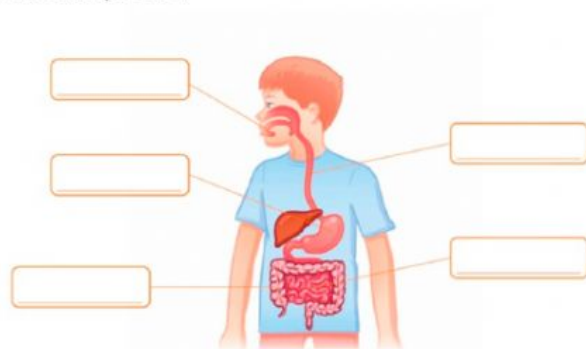


2. Look at the picture. Circle the trachea. Name the body system.

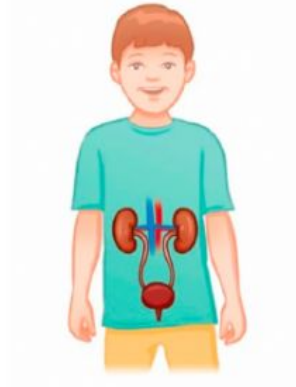


Body system: _____

3. Label the picture:



4. Circle the Kidneys. Name the body system:



Body system: _____

5. Complete the sentences:

- a) The _____ system moves blood through the heart and around the body.
- b) It moves the blood in the arteries and _____.
- c) Blood gives your body nutrients and _____.
- d) The heart is divided into four parts: the left and right atriums and the left and right _____.

6. True or False? Correct the false sentences:

- a) The digestive system eliminates waste products from your body. _____

- b) The kidneys clean the waste from your blood. _____

- c) This waste combines with blood to make urine. _____

- d) Urine collects in the bladder. _____

- e) When the bladder is full, your body tells you to go to the toilet. _____

7. Complete the sentences:

- a) The _____ system helps you breathe.
- b) You breathe in air through the _____ and mouth.
- c) The air goes down the _____ into your lungs.
- d) The lungs transfer the _____ to the circulatory system, where it moves around your body.
- e) The lungs also help release _____.