













Money Math

		
\$ 3.25	\$1.25	\$ 1.50
		
\$2.25	\$2.00	\$ \$.50
		
\$4.25	\$6.25	\$1.00
		
\$5.25	\$2.00	\$5.00



1. Cameron bought a bowl of spaghetti and a soda how much did he spend? _____








2. Joe had \$20.00 to spend he bought a hamburger, fries and a juice. How much did he have left? _____




3. Michael bought a chicken wrap, soda, and a strawberry cone. How much did he spend? _____



4. Mark had \$10.00 to spend on lunch. He bought ramen noodles, fries and a cupcake. How much money did he have left? _____

-  5. Jenny had \$ 15.00. She bought a sub sandwich and a coke.
How much money does she have left? _____
-  6. Sandra bought 2 tacos, fries, and a chocolate cone. How
much money did she spend? _____
-  7. Jack bought 2 orders of chicken nuggets, fries, and a juice.
How much money did he spend? _____
-  8. Sara has \$5.00 to spend on a snack. She buys 2 ice cream
cones. How much will she have left? _____
-  9. Heather went to lunch and bought a sub sandwich, spaghetti
and fries. How much money did she spend?

-  10. Sally and her mom went to lunch on Friday. They ordered
a hamburger, a chicken wrap, 2 fries and 2 sodas. How much
did they spend? _____