





Efetuando e fazendo a operação inversa

a)

$$\begin{array}{r} 24 \\ - 5 \\ \hline \end{array}$$




$$\begin{array}{r} \square \\ + 5 \\ \hline \end{array}$$




d)

$$\begin{array}{r} 93 \\ - 56 \\ \hline \end{array}$$




$$\begin{array}{r} \square \\ + 56 \\ \hline \end{array}$$




b)

$$\begin{array}{r} 94 \\ - 77 \\ \hline \end{array}$$




$$\begin{array}{r} \square \\ + 77 \\ \hline \end{array}$$




e)

$$\begin{array}{r} 95 \\ - 88 \\ \hline \end{array}$$




$$\begin{array}{r} \square \\ + 88 \\ \hline \end{array}$$



c)

$$\begin{array}{r} 968 \\ - 920 \\ \hline \end{array}$$



$$\begin{array}{r} \square \\ + 920 \\ \hline \end{array}$$

